

# SADLER MATHEMATICS METHODS

## UNIT 1

### WORKED SOLUTIONS

#### Chapter 1 Trigonometry

#### Exercise 1B

---

##### Question 1

**a**      $\sin x = 0.4$   
          $x = 24^\circ$

**b**      $\sin x = 0.75$   
          $x = 49^\circ$

**c**      $\sin x = 0.8$   
          $x = 53^\circ$

##### Question 2

**a**              $\sin x = 0.2$   
Ref angle =  $12^\circ$   
          $x = 180^\circ - 12^\circ$   
          $x = 168^\circ$

**b**              $\sin x = 0.3$   
Ref angle =  $17^\circ$   
          $x = 180^\circ - 17^\circ$   
         =  $163^\circ$

**c**              $\sin x = 0.55$   
Ref angle =  $33^\circ$   
          $x = 180^\circ - 33^\circ$   
         =  $147^\circ$

### Question 3

**a**      $\sin x = 0.5$   
           $x = 30^\circ, 150^\circ$

**b**      $\sin x = 0.15$   
           $x = 9^\circ, 171^\circ$

**c**      $\sin x = 0.72$   
           $x = 46^\circ, 134^\circ$

### Question 4

$$\begin{aligned} A &= \frac{1}{2} \times a \times b \sin C \\ &= \frac{1}{2} \times 5.4 \times 6.2 \times \sin 42^\circ \\ &= 11.2 \text{ cm}^2 \end{aligned}$$

### Question 5

$$\begin{aligned} A &= \frac{1}{2} \times 5.7 \times 7.3 \times \sin 68^\circ \\ &= 19.3 \text{ cm}^2 \end{aligned}$$

### Question 6

$$\begin{aligned} A &= \frac{1}{2} \times 5.8 \times 6.9 \times \sin 115^\circ \\ &= 18.1 \text{ cm}^2 \end{aligned}$$

**Question 7**

Missing angle  $110^\circ$

$$A = \frac{1}{2} \times 6.7 \times 8.8 \times \sin 110^\circ$$
$$= 27.7 \text{ cm}^2$$

**Question 8**

$$108 - (61 + 39) = 80^\circ$$

$$A = \frac{1}{2} \times 5.2 \times 6.8 \times \sin 80^\circ$$
$$= 17.4 \text{ cm}^2$$

**Question 9**

$$A = \frac{1}{2} \times 16.1 \times 19.5 \times \sin 118^\circ$$
$$= 138.6 \text{ cm}^2$$

**Question 10**

$$20.7 = \frac{1}{2} \times 6.2 \times x \times \sin 50^\circ$$
$$x = \frac{20.7 \times 2}{6.2 \times \sin 50^\circ} \text{ or use CP solve}$$
$$x = 8.7 \text{ cm}$$

**Question 11**

$$20.0 = \frac{1}{2} \times 7.2 \times x \times \sin 110^\circ$$
$$x = 5.9 \text{ cm}$$

**Question 12**

$$15.0 = \frac{1}{2} \times 7.5 \times x \times \sin 30^\circ$$

$$x = 8.0 \text{ cm}$$

**Question 13**

$$45.1 = \frac{1}{2} \times 14.9 \times x \times \sin 135^\circ$$

$$x = 8.6 \text{ cm}$$

**Question 14**

$$25.5 = \frac{1}{2} \times 8.0 \times 6.4 \times \sin x$$

$$\sin x = \frac{25.5 \times 2}{8.0 \times 6.4}$$

$$x = 84.9^\circ, 95.1^\circ$$

**Question 15**

$$72.7 = \frac{1}{2} \times 9.8 \times 14.9 \times \sin x$$

$$\sin x = \frac{72.7 \times 2}{9.8 \times 14.9}$$

$$x = 84.7^\circ, 95.3^\circ$$

## Exercise 1C

---

### Question 1

$$\frac{x}{\sin 85^\circ} = \frac{56}{\sin 74^\circ}$$
$$x = 58.0$$

### Question 2

$$180 - (74 + 34) = 72$$
$$\frac{x}{\sin 72^\circ} = \frac{12.4}{\sin 74^\circ}$$
$$x = 12.3$$

### Question 3

$$\frac{\sin x^\circ}{61} = \frac{\sin 48^\circ}{56}$$
$$\sin x^\circ = \frac{61 \times \sin 48^\circ}{56}$$
$$x = 54^\circ, 126^\circ \quad (48^\circ + 54^\circ < 180^\circ \text{ and } 48^\circ + 126^\circ < 180^\circ)$$

### Question 4

$$\frac{\sin x^\circ}{3.4} = \frac{\sin 123^\circ}{11.8}$$
$$\sin x^\circ = \frac{3.4 \times \sin 123^\circ}{11.8}$$
$$x = 14^\circ$$

### Question 5

$$\frac{\sin x^\circ}{16.3} = \frac{\sin 38^\circ}{10.4}$$

$$\sin x^\circ = \frac{16.3 \times \sin 38^\circ}{10.4}$$

$$x = 75^\circ, 105^\circ$$

### Question 6

$$\frac{\sin \alpha}{51} = \frac{\sin 65^\circ}{72}$$

$$\alpha = 40^\circ$$

$$\beta = 140^\circ$$

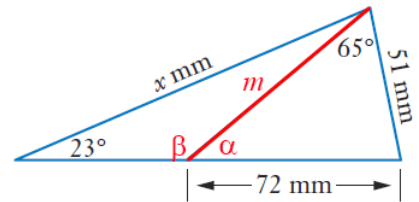
$$\theta = 180 - 65 - 40 = 75^\circ$$

$$\frac{m}{\sin 75^\circ} = \frac{72}{\sin 65^\circ}$$

$$m = 76.7 \text{ mm}$$

$$\frac{x}{\sin 140^\circ} = \frac{76.7}{\sin 23^\circ}$$

$$x = 126 \text{ mm}$$



### Question 7

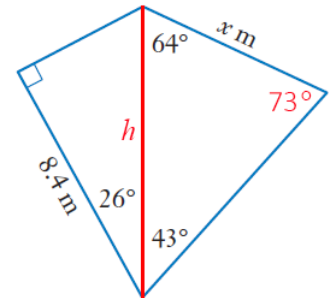
$$180 - 64 - 43 = 73$$

$$\cos 26^\circ = \frac{8.4}{h}$$

$$\therefore h = 9.346 \text{ m}$$

$$\frac{x}{\sin 43^\circ} = \frac{9.346}{\sin 73^\circ}$$

$$x = 6.7 \text{ m}$$



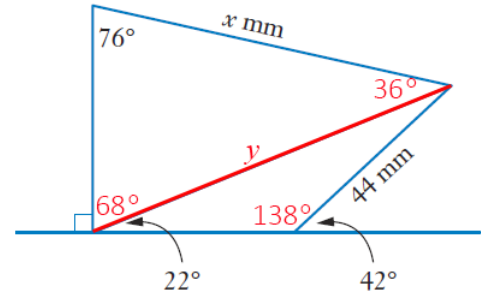
### Question 8

$$\frac{44}{\sin 22^\circ} = \frac{y}{\sin 138^\circ}$$

$$y = 78.59 \text{ mm}$$

$$\frac{78.59}{\sin 76^\circ} = \frac{x}{\sin 68^\circ}$$

$$x = 75 \text{ mm}$$

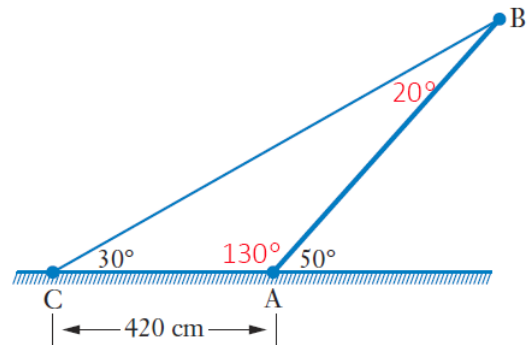


### Question 9

$$\frac{\sin 20^\circ}{420} = \frac{\sin 30^\circ}{AB}$$

$$AB = \frac{420 \times \sin 30^\circ}{\sin 20^\circ}$$

$$= 614 \text{ cm}$$



### Question 10

$$\frac{a}{\sin 57^\circ} = \frac{247}{\sin 108^\circ}$$

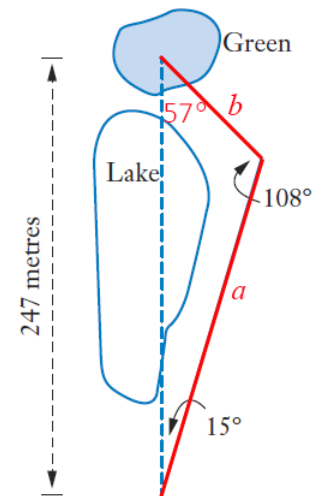
$$a = 217.8$$

$$\frac{b}{\sin 15^\circ} = \frac{247}{\sin 108^\circ}$$

$$b = 67.2$$

$$\text{Difference} = 217.8 + 67.2 - 247$$

$$= 38 \text{ m}$$



### Question 11

$$x^2 = 58^2 + 73^2 - 2(58)(73)\cos 52^\circ$$

$$x = 59 \text{ mm}$$

**Question 12**

$$x^2 = 7.3^2 + 9.8^2 - 2(7.3)(9.8)\cos 114^\circ$$

$$x = 14.4 \text{ cm}$$

**Question 13**

$$\cos x^\circ = \frac{7.3^2 + 6.8^2 - 5.2^2}{2(7.3)(6.8)}$$

$$x = 43^\circ$$

**Question 14**

$$\cos x = \frac{84^2 + 124^2 - 173^2}{2(84)(124)}$$

$$x = 11^\circ$$

**Question 15**

$$x^2 = 23^2 + 31^2 - 2(23)(31)\cos 108^\circ$$

$$x = 44 \text{ m}$$

**Question 16**

$$s^2 = 85^2 - 51^2$$

$$s = 68$$

$$\cos x = \frac{68^2 + 83^2 - 79^2}{2(68)(83)}$$

$$x = 62^\circ$$



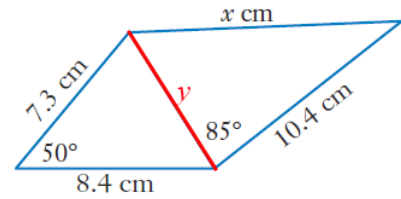
### Question 17

$$y^2 = 8.4^2 + 7.3^2 - 2(8.4)(7.3)\cos 50^\circ$$

$$y = 6.71 \text{ cm}$$

$$x^2 = 6.71^2 + 10.4^2 - 2(6.71)(10.4)\cos 85^\circ$$

$$x = 11.9 \text{ cm}$$



### Question 18

$$\cos \alpha = \frac{135^2 + 128^2 - 123^2}{2(135)(128)}$$

$$\alpha = 55.7^\circ$$

$$\cos \beta = \frac{139^2 + 147^2 - 143^2}{2(139)(147)}$$

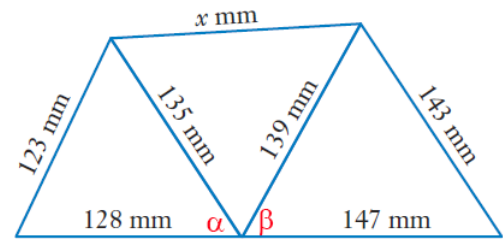
$$\beta = 59.9^\circ$$

$$180^\circ - 55.7^\circ - 59.9^\circ$$

$$= 64.4^\circ$$

$$x^2 = 135^2 + 139^2 - 2(135)(139)\cos 64.4^\circ$$

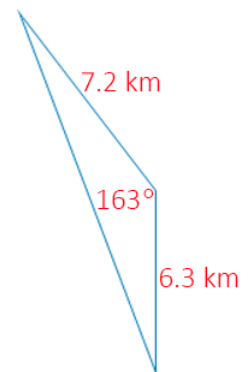
$$x = 146 \text{ mm}$$



### Question 19

$$SF^2 = 6.3^2 + 7.2^2 - 2(6.3)(7.2)\cos 163^\circ$$

$$SF = 13.4 \text{ km}$$



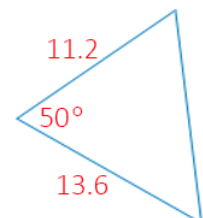
### Question 20

$$\text{Jim: } 1.4 \times 8 = 11.2 \text{ m}$$

$$\text{Toni: } 1.7 \times 8 = 13.6 \text{ m}$$

$$x^2 = 11.2^2 + 13.6^2 - 2(11.2)(13.6)\cos 50^\circ$$

$$x = 10.7 \text{ m}$$



**Question 21**

$$\frac{\sin x^\circ}{19.8} = \frac{\sin 42^\circ}{13.7}$$
$$\sin x^\circ = \frac{19.8 \sin 42^\circ}{13.7}$$
$$x = 75^\circ, 105^\circ$$

**Question 22**

$$\cos x = \frac{12.3^2 + 13.8^2 - 19.9^2}{2(12.3)(13.8)}$$
$$x = 99^\circ$$

**Question 23**

$$x^2 = 481^2 + 563^2 - 2(481)(563)\cos 72^\circ$$
$$x = 617 \text{ m}$$

**Question 24**

$$180^\circ - 112^\circ - 27^\circ = 41^\circ$$

$$\frac{x}{\sin 41^\circ} = \frac{7.62}{\sin 112^\circ}$$
$$x = \frac{7.62 \times \sin 41^\circ}{\sin 112^\circ}$$
$$= 5.39 \text{ km}$$

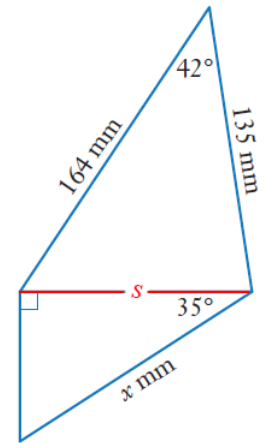
### Question 25

$$s^2 = 164^2 + 135^2 - 2(164)(135)\cos 42^\circ$$

$$s = 110.5 \text{ mm}$$

$$\cos 35^\circ = \frac{110.5}{x}$$

$$x = \frac{110.5}{\cos 35^\circ}$$
$$= 135 \text{ mm}$$



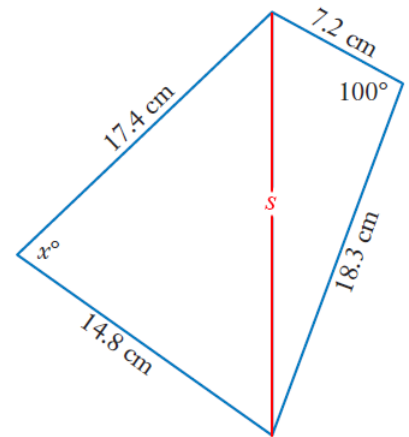
### Question 26

$$s^2 = 7.2^2 + 18.3^2 - 2(7.2)(18.3)\cos 100^\circ$$

$$s = 20.8$$

$$\cos x = \frac{17.4^2 + 14.8^2 - 20.8^2}{2(17.4)(14.8)}$$

$$x = 80^\circ$$



### Question 27

$$\frac{s}{\sin 58^\circ} = \frac{72}{\sin 61^\circ}$$

$$s = \frac{72 \times \sin 58^\circ}{\sin 61^\circ}$$

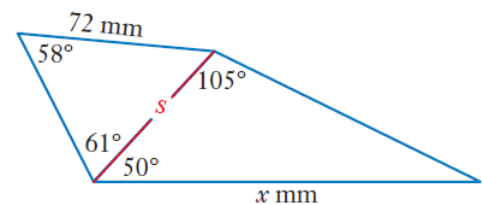
$$= 69.8 \text{ mm}$$

Missing angle in  $\Delta 2$  :  $25^\circ$

$$\frac{x}{\sin 105^\circ} = \frac{69.8}{\sin 25^\circ}$$

$$x = \frac{69.8 \times \sin 105^\circ}{\sin 25^\circ}$$

$$= 160 \text{ mm}$$



### Question 28

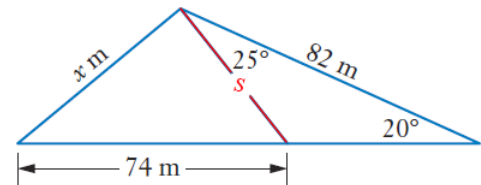
Missing angle:  $135^\circ$

$$\frac{s}{\sin 20^\circ} = \frac{82}{\sin 135^\circ}$$
$$s = \frac{82 \times \sin 20^\circ}{\sin 135^\circ}$$

$$= 39.7 \text{ m}$$

$$x^2 = 39.7^2 + 74^2 - 2(39.7)(74)\cos 45^\circ$$

$$x = 54 \text{ m}$$



### Question 29

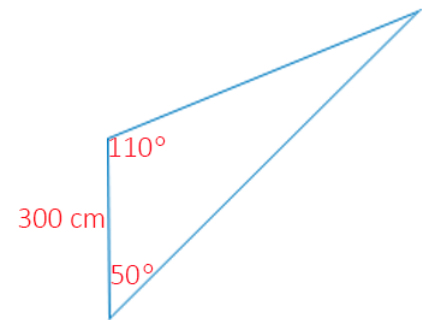
Missing angle:  $20^\circ$

$$\frac{\sin 20^\circ}{300} = \frac{\sin 50^\circ}{AC}$$

$$AC = \frac{300 \times \sin 50^\circ}{\sin 20^\circ}$$
$$= 672 \text{ cm}$$

$$\frac{\sin 20^\circ}{300} = \frac{\sin 110^\circ}{BC}$$

$$BC = \frac{300 \times \sin 110^\circ}{\sin 20^\circ}$$
$$= 824 \text{ cm}$$

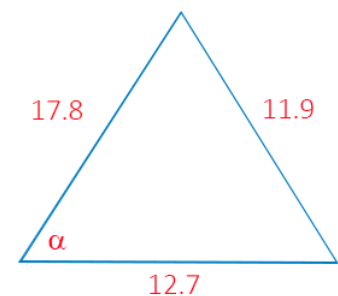


### Question 30

Smallest angle opposite smallest side

$$\cos \alpha = \frac{17.8^2 + 12.7^2 - 11.9^2}{2(17.8)(12.7)}$$

$$\alpha = 42^\circ$$



### Question 31

$$\frac{\sin 72^\circ}{9.1} = \frac{\sin B}{7.3}$$

$$\sin B = \frac{7.3 \times \sin 72^\circ}{9.1}$$

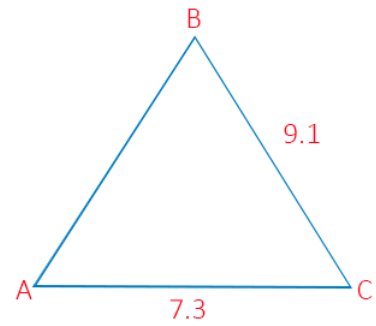
$$B = 49.7^\circ$$

$$\angle C = 180^\circ - 72^\circ - 49.7^\circ = 58.3^\circ$$

$$\frac{AB}{\sin 58.3^\circ} = \frac{9.1}{\sin 72^\circ}$$

$$AB = \frac{9.1 \times \sin 58.3^\circ}{\sin 72^\circ}$$

$$= 8.1 \text{ cm}$$



### Question 32

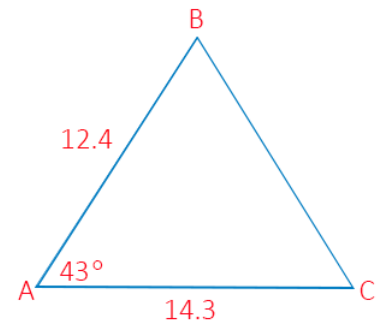
$$BC^2 = 12.4^2 + 14.3^2 - 2(12.4)(14.3) \cos 43^\circ$$

$$BC = 9.9 \text{ cm}$$

$$\cos C^\circ = \frac{9.9^2 + 14.3^2 - 12.4^2}{2(9.9)(14.3)}$$

$$C = 58^\circ$$

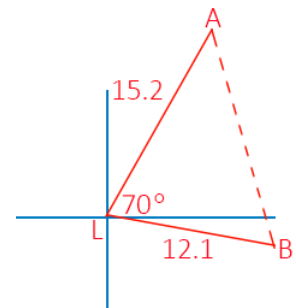
$$B = 180^\circ - 43^\circ - 58^\circ = 79^\circ$$



### Question 33

$$AB^2 = 15.2^2 + 12.1^2 - 2(15.2)(12.1) \cos 70^\circ$$

$$AB = 15.9 \text{ km}$$

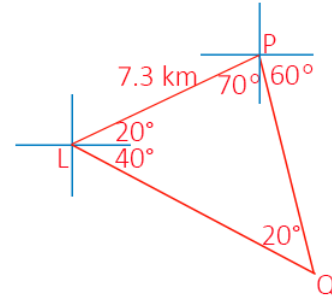


**Question 34**

$$\frac{7.3}{\sin 20^\circ} = \frac{LQ}{\sin 100^\circ}$$

$$LQ = \frac{7.3 \times \sin 100^\circ}{\sin 20^\circ}$$

$$= 21.0 \text{ km}$$

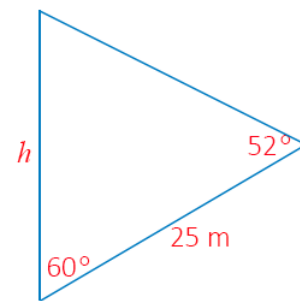


**Question 35**

$$\frac{h}{\sin 52^\circ} = \frac{25}{\sin 68^\circ}$$

$$h = \frac{25 \times \sin 52^\circ}{\sin 68^\circ}$$

$$= 21 \text{ m}$$



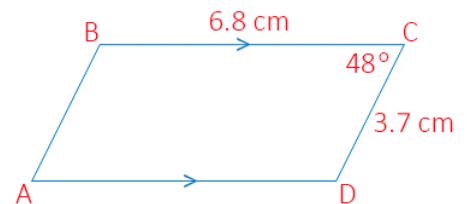
**Question 36**

$$BD^2 = 6.8^2 + 3.7^2 - 2(6.8)(3.7)\cos 48^\circ$$

$$BD = 5.1 \text{ cm}$$

$$AC^2 = 3.7^2 + 6.8^2 - 2(3.7)(6.8)\cos 132^\circ$$

$$AC = 9.7 \text{ cm}$$



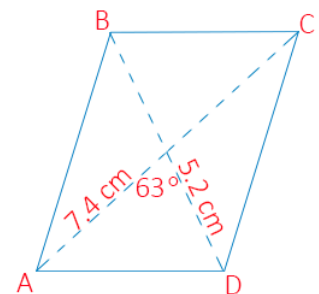
**Question 37**

$$AD^2 = 7.4^2 + 5.2^2 - 2(7.4)(5.2)\cos 63^\circ$$

$$AD = 6.8 \text{ cm}$$

$$CD^2 = 7.4^2 + 5.2^2 - 2(7.4)(5.2)\cos 117^\circ$$

$$CD = 10.8 \text{ cm}$$



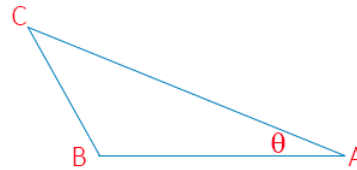
### Question 38

a

$$AC = 2.6 \text{ m}$$

$$\cos \theta = \frac{2.6^2 + 2^2 - 1^2}{2(2.6)(2)}$$

$$\theta = 20.2^\circ$$



b

$$\cos \theta = \frac{2.1^2 + 2^2 - 1^2}{2(2.1)(2)}$$

$$\theta = 28.1^\circ$$

### Question 39

a  $\triangle CHE$  is right angled with  $HE = 450 \text{ cm}$

$$\frac{x}{\sin 20^\circ} = \frac{900}{\sin 140^\circ}$$
$$x = \frac{900 \times \sin 20^\circ}{\sin 140^\circ}$$
$$= 479 \text{ cm}$$

b  $ED = \frac{1}{2} \times CE$

$$= 239 \text{ cm}$$

c  $DF^2 = 300^2 + 239.4^2 - 2(300)(239.4) \cos 20^\circ$

$$DF = 111 \text{ cm}$$

d  $CF^2 = 478.9^2 + 300^2 - 2(478.9)(300) \cos 20^\circ$

$$CF = 222 \text{ cm}$$

### Question 40

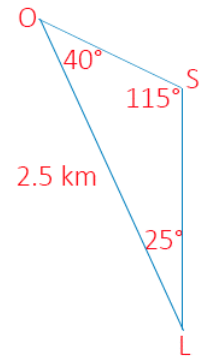
**a**  $d^2 = 90^2 + 70^2 - 2(90)(70)\cos 150^\circ$   
 $d = 154.6 \text{ mm}$   
 $= 155 \text{ mm (nearest mm)}$

**b** At 5:10 the angle between the hands is  $95^\circ$   
 $d^2 = 90^2 + 70^2 - 2(90)(70)\cos 95^\circ$   
 $d = 118.7 \text{ mm}$   
 $= 119 \text{ mm (nearest mm)}$

### Question 41

**a**  $\frac{SL}{\sin 40^\circ} = \frac{2.5}{\sin 115^\circ}$   
 $SL = \frac{2.5 \times \sin 40^\circ}{\sin 115^\circ}$   
 $= 1.77 \text{ km}$

**b**  $\frac{OS}{\sin 25^\circ} = \frac{2.5}{\sin 115^\circ}$   
 $OS = \frac{2.5 \times \sin 25^\circ}{\sin 115^\circ}$   
 $= 1.17 \text{ km}$





### Question 42

**a**  $AB^2 = 4^2 + 3^2$

$$AB = 5$$

$$BC^2 = 8^2 + 8^2$$

$$BC = 8\sqrt{2}$$

$$AC^2 = 12^2 + 5^2$$

$$AC = 13$$

$$\cos B = \frac{5^2 + (8\sqrt{2})^2 - 13^2}{2(5)(8\sqrt{2})}$$

$$B = 98^\circ$$

**b**  $\tan \alpha = \frac{3}{4}$

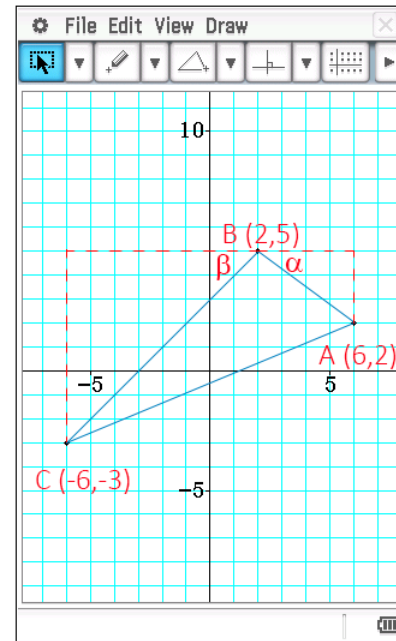
$$\alpha = 36.9^\circ$$

$$\tan \beta = \frac{8}{8}$$

$$\beta = 45^\circ$$

$$\therefore \angle ABC = 180^\circ - 45^\circ - 36.9^\circ$$

$$= 98^\circ \text{ (to nearest degree)}$$



### Question 43

$$\frac{40}{\sin 15^\circ} = \frac{BD}{\sin 20^\circ}$$

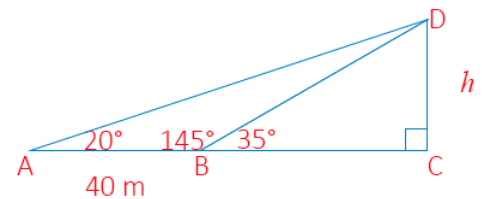
$$BD = \frac{40 \times \sin 20^\circ}{\sin 15^\circ}$$

$$= 52.9 \text{ m}$$

$$\sin 35^\circ = \frac{h}{52.9}$$

$$h = 52.9 \times \sin 35^\circ$$

$$= 30 \text{ m (to nearest metre)}$$



### Question 44

$$\tan 17^\circ = \frac{37}{AB}$$

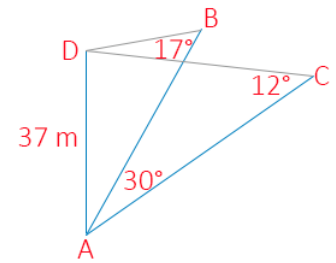
$$AB = \frac{37}{\tan 17^\circ}$$
$$= 121m$$

$$\tan 12^\circ = \frac{37}{AC}$$

$$AC = \frac{37}{\tan 12^\circ}$$
$$= 174m$$

$$BC^2 = 121^2 + 174^2 - 2(121)(174)\cos 30^\circ$$

$$BC = 92m$$

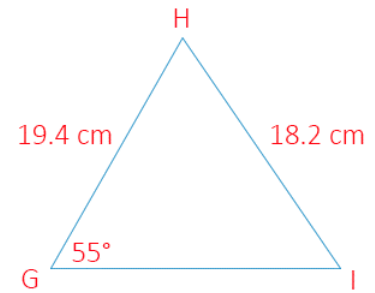


### Question 45

From the information given, the ambiguous case exists.

We are given two sides but not the angle in between.

$$\begin{aligned}\frac{\sin \alpha}{19.4} &= \frac{\sin 55^\circ}{18.2} \\ \sin \alpha &= \frac{19.4 \times \sin 55^\circ}{18.2} \\ \alpha &= 61^\circ \text{ or } 119^\circ\end{aligned}$$



If  $\angle I = 61^\circ$

$$\begin{aligned}\therefore \angle H &= 180^\circ - 61^\circ - 55^\circ \\ &= 64^\circ\end{aligned}$$

$$\begin{aligned}\frac{GI}{\sin 64^\circ} &= \frac{18.2}{\sin 55^\circ} \\ GI &= \frac{18.2 \times \sin 64^\circ}{\sin 55^\circ} \\ &= 20 \text{ cm}\end{aligned}$$

Missing measurements  $61^\circ, 64^\circ, 20 \text{ cm}$

If  $\angle I = 119^\circ$

$$\begin{aligned}\therefore \angle H &= 180^\circ - 119^\circ - 55^\circ \\ &= 6^\circ\end{aligned}$$

$$\begin{aligned}\frac{GI}{\sin 6^\circ} &= \frac{18.2}{\sin 55^\circ} \\ GI &= \frac{18.2 \times \sin 6^\circ}{\sin 55^\circ} \\ &= 2.3 \text{ cm}\end{aligned}$$

Missing measurements  $119^\circ, 6^\circ, 2.3 \text{ cm}$

### Question 46

$$\tan 20^\circ = \frac{40}{AB}$$

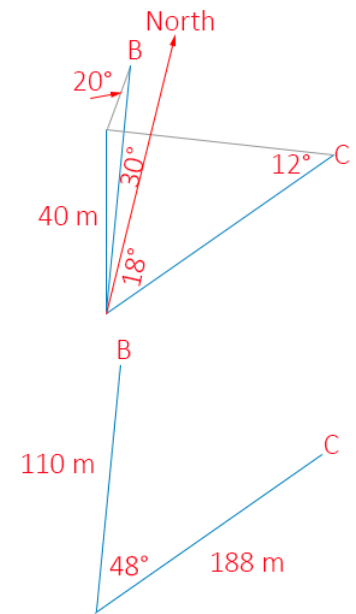
$$AB = \frac{40}{\tan 20^\circ}$$
$$= 110 \text{ m}$$

$$\tan 12^\circ = \frac{40}{AC}$$

$$AC = \frac{40}{\tan 12^\circ}$$
$$= 188 \text{ m}$$

$$BC^2 = 110^2 + 188^2 - 2(110)(188)\cos 48^\circ$$

$$BC = 141 \text{ m}$$



### Question 47

a  $\angle BCD = 80^\circ$  (opposite angles in a cyclic quad are supplementary)

b

$$BD^2 = 7.2^2 + 6.1^2 - 2(7.2)(6.1)\cos 100^\circ$$

$$BD = 10.2$$

$$\frac{\sin \angle ADB}{7.2} = \frac{\sin 100^\circ}{10.2}$$

$$\sin \angle ADB = \frac{7.2 \times \sin 100^\circ}{10.2}$$

$$\angle ADB = 44^\circ$$

$$\frac{\sin \angle BDC}{8.2} = \frac{\sin 80^\circ}{10.2}$$

$$\sin \angle BDC = \frac{8.2 \times \sin 80^\circ}{10.2}$$

$$\angle BDC = 52^\circ$$

$$\angle ADC = \angle ADB + \angle BDC$$

$$= 44^\circ + 52^\circ$$

$$= 96^\circ$$

c

In  $\triangle BDC$ ,  $\angle DBC = 48^\circ$

$$\frac{DC}{\sin 48^\circ} = \frac{8.2}{\sin 52^\circ}$$

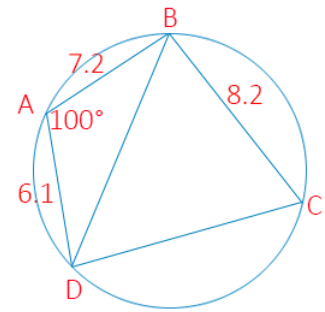
$$DC = \frac{8.2 \times \sin 48^\circ}{\sin 52^\circ}$$

$$= 7.7 \text{ cm}$$

$\therefore$  Perimeter of  $ABCD$

$$= 7.2 + 6.1 + 8.2 + 7.7$$

$$= 29.2 \text{ cm}$$



**d**

Area  $\triangle ABC$

$$\begin{aligned} &= \frac{1}{2} \times 7.2 \times 6.1 \times \sin 100^\circ \\ &= 21.6 \end{aligned}$$

Area  $\triangle BDC$

$$\begin{aligned} &= \frac{1}{2} \times 8.2 \times 7.7 \times \sin 80^\circ \\ &= 31.1 \end{aligned}$$

$$\therefore \text{Area} = 21.6 + 31.1 = 52.7 \text{ cm}^2$$

**Question 48**

**a**

$$\begin{aligned} AC^2 &= 10^2 + 12^2 - 2(10)(12)\cos\theta \\ &= 244 - 240\cos\theta \end{aligned}$$

**b**

$$\begin{aligned} x^2 &= 14^2 + 9^2 - 2(14)(9)\cos\phi \\ &= 277 - 252\cos\phi \end{aligned}$$

**c**

$\theta$  and  $\phi$  are opposite angles in a cyclic quadrilateral

$$\therefore \phi = 180 - \theta$$

$$AC^2 = 244 - 240\cos\theta = 277 - 252\cos(180 - \theta)$$

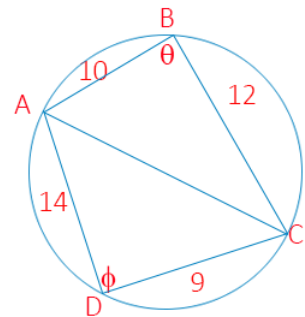
$$-33 - 240\cos\theta = -252 \times (-\cos\theta)$$

$$-33 = 252\cos\theta + 240\cos\theta$$

$$-33 = 492\cos\theta$$

$$\cos\theta = \frac{-33}{492}$$

$$\theta = 94^\circ$$



### Question 49

$$\cos \theta = \frac{63^2 + 55^2 - 22^2}{2(63)(55)}$$

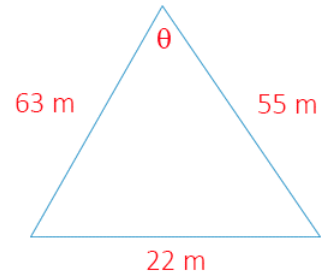
$$\theta = 20^\circ \text{ (nearest degree)}$$

$$A = \frac{1}{2} \times ab \sin C$$

$$= \frac{1}{2} \times 63 \times 55 \times \sin 20^\circ$$

$$= 592.5 \text{ m}^2$$

(exact use of  $\theta$  gives  $593.97\text{m}^2$ )



Heron's Rule

$$S = \frac{63 + 55 + 22}{2}$$

$$= 70$$

$$A = \sqrt{70(70 - 63)(70 - 55)(70 - 22)}$$

$$= 593.97 \text{ m}^2$$

### Question 50

$$\frac{1}{2}(25 + 48 + 53) = 63$$

$$A_1 = \sqrt{63(63 - 25)(63 - 48)(63 - 53)}$$
$$= 599.2$$

$$\frac{1}{2}(33 + 38 + 45) = 58$$

$$A_2 = \sqrt{58(58 - 33)(58 - 38)(58 - 45)}$$
$$= 614$$

$$614 - 599 = 15\text{m}^2$$

## Exercise 1D

---

### Question 1

$$\sin 0^\circ = 1$$

### Question 2

$$\sin 30^\circ = \frac{1}{2}$$

### Question 3

$$\tan 45^\circ = 1$$

### Question 4

$$\sin 60^\circ = \frac{\sqrt{3}}{2}$$

### Question 5

$$\cos 60^\circ = \frac{1}{2}$$

### Question 6

$$\cos 0^\circ = 1$$

### Question 7

$$\tan 90^\circ = \text{undefined}$$



**Question 8**

$$\cos 45^\circ = \frac{1}{\sqrt{2}}$$

**Question 9**

$$\cos 30^\circ = \frac{\sqrt{3}}{2}$$

**Question 10**

$$\tan 60^\circ = \sqrt{3}$$

**Question 11**

$$\sin 90^\circ = 1$$

**Question 12**

$$\tan 0^\circ = 0$$

**Question 13**

$$\cos 60^\circ = \frac{1}{2}$$

**Question 14**

$$\sin 45^\circ = \frac{1}{\sqrt{2}}$$

**Question 15**

$$\tan 30^\circ = \frac{1}{\sqrt{3}}$$

**Question 16**

$$\sin 120^\circ = \sin 60^\circ = \frac{\sqrt{3}}{2}$$

**Question 17**

$$\cos 135^\circ = -\cos 45^\circ = -\frac{1}{\sqrt{2}}$$

**Question 18**

$$\cos 150^\circ = -\cos 30^\circ = -\frac{\sqrt{3}}{2}$$

**Question 19**

$$\cos 120^\circ = -\cos 60^\circ = -\frac{1}{2}$$

**Question 20**

$$\cos 180^\circ = -1$$

**Question 21**

$$\tan 135^\circ = -\tan 45^\circ = -1$$

**Question 22**

$$\tan 120^\circ = -\tan 60^\circ = -\sqrt{3}$$

**Question 23**

$$\tan 150^\circ = -\tan 30^\circ = \frac{-1}{\sqrt{3}}$$

**Question 24**

$$\tan 180^\circ = \tan 0^\circ = 0$$

**Question 25**

$$\sin 180^\circ = \sin 0^\circ = 0$$

**Question 26**

$$\sin 150^\circ = \sin 30^\circ = \frac{1}{2}$$

**Question 27**

$$\sin 135^\circ = \sin 45^\circ = \frac{1}{\sqrt{2}}$$

**Question 28**

$$\begin{aligned}\sin 60^\circ &= \frac{9}{x} \\ x &= \frac{9}{\frac{\sqrt{3}}{2}} \\ &= 9 \times \frac{2}{\sqrt{3}} \\ &= \frac{18}{\sqrt{3}} \times \frac{\sqrt{3}}{\sqrt{3}} \\ &= \frac{18\sqrt{3}}{3} \\ &= 6\sqrt{3}\end{aligned}$$

**Question 29**

$$\begin{aligned}x^2 + 9 &= 49 \\ x^2 &= 40 \\ x &= \sqrt{40} \\ &= 2\sqrt{10}\end{aligned}$$

**Question 30**

$$\begin{aligned}\sin 45^\circ &= \frac{h}{10} \\ \frac{\sqrt{2}}{2} &= \frac{h}{10} \\ h &= \frac{10\sqrt{2}}{2} \\ &= 5\sqrt{2}\end{aligned}$$

$$\begin{aligned}\sin 60^\circ &= \frac{x}{5\sqrt{2}} \\ \frac{\sqrt{3}}{2} &= \frac{x}{5\sqrt{2}} \\ x &= \frac{\sqrt{3}}{2} \times 5\sqrt{2} \\ &= \frac{5\sqrt{6}}{2}\end{aligned}$$

**Question 31**

$$\begin{aligned}x^2 &= (2\sqrt{3})^2 + 4^2 - 2(2\sqrt{3})(4)\cos 150^\circ \\ &= 12 + 16 - 16\sqrt{3} \times \left(-\frac{\sqrt{3}}{2}\right) \\ &= 28 + \frac{16 \times 3}{2} \\ x^2 &= 52 \\ x &= 2\sqrt{13}\end{aligned}$$

### Question 32

$$\begin{aligned}\frac{10}{\sin 45^\circ} &= \frac{m}{\sin 60^\circ} \\ m &= \frac{10 \times \sin 60^\circ}{\sin 45^\circ} \\ &= 10 \times \frac{\sqrt{3}}{2} \times \sqrt{2} \\ &= \frac{10\sqrt{6}}{2} \\ &= 5\sqrt{6}\end{aligned}$$

$$\begin{aligned}\tan 30^\circ &= \frac{x}{m} \\ x &= m \times \tan 30^\circ \\ &= 5\sqrt{6} \times \frac{1}{\sqrt{30}} \\ &= 5\sqrt{2} \text{ cm}\end{aligned}$$

### Question 33

$$\cos 30^\circ = \frac{x}{h_1}$$

$$\frac{\sqrt{3}}{2} = \frac{x}{h_1}$$

$$\sqrt{3}h_1 = 2x$$

$$h_1 = \frac{2}{\sqrt{3}}x$$

$$\sin 60^\circ = \frac{h_1}{h_2}$$

$$\frac{\sqrt{3}}{2} = \frac{2x}{\sqrt{3}h_2}$$

$$3h_2 = 4x$$

$$h_2 = \frac{4}{3}x$$

$$\frac{y}{\sin \theta} = \frac{h_2}{\sin 45^\circ}$$

$$y = \frac{h_2 \times \sin \theta}{\sin 45^\circ}$$

$$= \frac{4}{3}x \times \sin \theta \times \sqrt{2}$$

$$= \frac{4\sqrt{2}(x) \sin \theta}{3}$$

**Question 34**

$$\begin{aligned}h_1^2 &= 4^2 + (2\sqrt{2})^2 \\ &= 16 + 8 \\ h &= \sqrt{24} = 2\sqrt{6}\end{aligned}$$

$$\begin{aligned}\frac{S}{\sin \theta} &= \frac{2\sqrt{6}}{\sin 60^\circ} \\ S &= \frac{2\sqrt{6} \sin \theta}{\frac{\sqrt{3}}{2}} \\ &= 2\sqrt{6} \times \sin \theta \times \frac{2}{\sqrt{3}} \\ &= 4\sqrt{2} \sin \theta\end{aligned}$$

$$\begin{aligned}\frac{y}{\sin 45^\circ} &= \frac{4\sqrt{2} \sin \theta}{\sin \phi} \\ y &= \frac{4\sqrt{2} \sin \theta}{\sin \phi} \times \frac{1}{2} \\ &= \frac{4 \sin \theta}{\sin \phi}\end{aligned}$$



## Exercise 1E

---

### Question 1

a  $30^\circ$

b  $\tan 30^\circ = \frac{1}{\sqrt{3}} = \frac{\sqrt{3}}{3}$

### Question 2

a  $45^\circ$

b  $\tan 45^\circ = 1$

### Question 3

a  $60^\circ$

b  $\tan 60^\circ = \sqrt{3}$

### Question 4

a  $120^\circ$

b  $\tan 120^\circ = -\tan 60^\circ = -\sqrt{3}$

### Question 5

a  $135^\circ$

b  $\tan 135^\circ = -\tan 45^\circ = -1$

### Question 6

a  $150^\circ$

b  $\tan 150^\circ = -\tan 30^\circ = -\frac{1}{\sqrt{3}} = -\frac{\sqrt{3}}{3}$

### Question 7

gradient =  $\tan \theta$

## Miscellaneous exercise one

---

### Question 1

**a**

$$\begin{aligned} & 2(3x+4)+5(x-3) \\ & = 6x+8+5x-15 \\ & = 11x-7 \end{aligned}$$

**b**

$$\begin{aligned} & 2(3x+4)-5(x-3) \\ & = 6x+8-5x+15 \\ & = x+23 \end{aligned}$$

**c**

$$\begin{aligned} & 5+2(5x-4) \\ & = 5+10x-8 \\ & = 10x-3 \end{aligned}$$

**d**

$$\begin{aligned} & 5-2(5x-4) \\ & = 5-10x+8 \\ & = -10x+13 \end{aligned}$$

**e**

$$\begin{aligned} & 2(3-4x)+5(3x+1) \\ & = 6-8x+15x+5 \\ & = 7x+11 \end{aligned}$$

**f**

$$\begin{aligned} & 2(3-4x)-5(3x+1) \\ & = 6-8x-15x-5 \\ & = -23x+1 \end{aligned}$$

**g**

$$\begin{aligned} & (x+3)(x+5) \\ & = x^2+8x+15 \end{aligned}$$

**h**

$$\begin{aligned}(x+3)(x-5) \\ = x^2 - 2x - 15\end{aligned}$$

**i**

$$\begin{aligned}(2x+5)(x+3) \\ = 2x^2 + 6x + 5x + 15 \\ = 2x^2 + 11x + 15\end{aligned}$$

**j**

$$\begin{aligned}(2x-5)(x-3) \\ = 2x^2 - 5x - 6x + 15 \\ = 2x^2 - 11x + 15\end{aligned}$$

## Question 2

**a**  $2x+8 = 2(x+4)$

**b**  $6y+9 = 3(2y+3)$

**c**  $16ab+12ac+8a^2 = 4a(4b+3c+2a)$

**d**  $a^2+a = a(a+1)$

**e**  $x^2+7x-8 = (x+8)(x-1)$

**f**  $x^2-9x+8 = (x-8)(x-1)$

**g**  $x^2+5x-14 = (x+7)(x-2)$

**h**  $x^2-8x+12 = (x-6)(x-2)$

**i**  $x^2-16 = (x+4)(x-4)$

**j**  $2a^2-18 = 2(a^2-9) = 2(a-3)(a+3)$

### Question 3

a  $\sqrt{20} = \sqrt{4} \times \sqrt{5} = 2\sqrt{5}$

b  $\sqrt{45} = \sqrt{9} \times \sqrt{5} = 3\sqrt{5}$

c  $\sqrt{200} = \sqrt{100} \times \sqrt{2} = 10\sqrt{2}$

d  $3\sqrt{5} \times 2\sqrt{5} = 6 \times 5 = 30$

e  $\sqrt{15} \times \sqrt{3} = \sqrt{5} \times \sqrt{3} \times \sqrt{3} = 3\sqrt{5}$

f  $6\sqrt{3} \times \sqrt{6} = 6\sqrt{3} \times \sqrt{2} \times \sqrt{3} = 18\sqrt{2}$

g  $3\sqrt{5} \times 7\sqrt{2} = 21\sqrt{10}$

h

$$\begin{aligned}(3\sqrt{2}+1)^2 &= (3\sqrt{2}+1)(3\sqrt{2}+1) \\ &= 18+3\sqrt{2}+3\sqrt{2}+1 \\ &= 19+6\sqrt{2}\end{aligned}$$

### Question 4

$$\cos 80^\circ = \frac{a}{l}$$

$$l = \frac{a}{\cos 80^\circ}$$

$$\cos 75^\circ = \frac{a+20}{l}$$

$$l = \frac{a+20}{\cos 75^\circ}$$

$$\frac{a+20}{\cos 75^\circ} = \frac{a}{\cos 80^\circ}$$

$$\cos 80^\circ(a+20) = a \cos 75^\circ$$

$$a \cos 80^\circ + 20 \cos 80^\circ = a \cos 75^\circ$$

$$a \cos 80^\circ - a \cos 75^\circ = -20 \cos 80^\circ$$

$$a(\cos 80^\circ - \cos 75^\circ) = -20 \cos 80^\circ$$

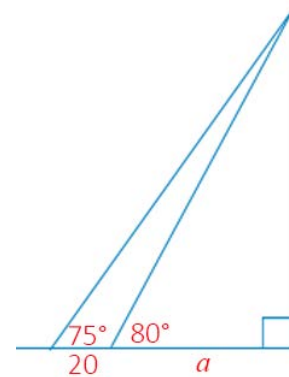
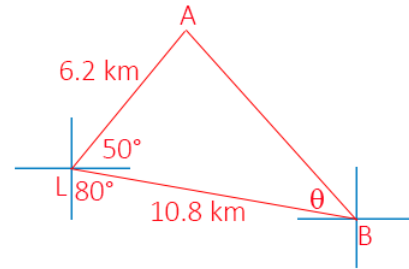
$$a = \frac{-20 \cos 80^\circ}{(\cos 80^\circ - \cos 75^\circ)}$$

$$= 40.78 \text{ cm}$$

$$\therefore l = \frac{a}{\cos 80^\circ}$$

$$= \frac{40.78}{\cos 80^\circ}$$

$$= 235 \text{ cm (nearest cm)}$$



### Question 5

$$AB^2 = 6.2^2 + 10.8^2 - 2(6.2)(10.8)\cos 60^\circ$$

$$AB = 9.39$$

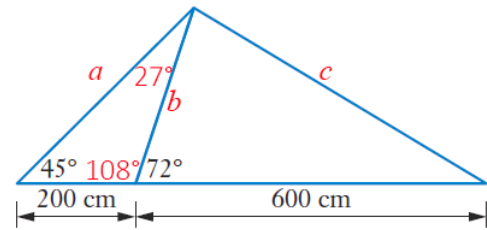
$$\frac{\sin \theta}{6.2} = \frac{\sin 60^\circ}{9.39}$$

$$\sin \theta = \frac{6.2 \times \sin 60^\circ}{9.39}$$

$$\theta = 35^\circ$$

$\therefore$  Bearing of A from B is  $280 + 35 = 315^\circ$

### Question 6



A circle with radius ' $r$ ' has a circumference of  $2\pi r$  and an area of  $\pi r^2$ .

If the radius is multiplied by a factor of  $k$ , the circumference becomes  $2 \times \pi \times k(r) = 2k\pi r = k(2\pi r)$ .

The circumference increases by the same factor,  $k$ , and so is in direct proportion.

The relationship between radius and circumference is linear which is required for direct proportion.

When the radius is multiplied by  $k$ , the area of the circle becomes  $\pi \times (kr)^2 = k^2\pi r^2$ .

The area is  $k^2$  times bigger than the original. Area and radius are not in direct proportion.

The relationship between  $A$  and  $r$  is also not linear,  $A = \pi r^2$ , so they cannot be in direct proportion.

### Question 7

$$\begin{aligned}\frac{200}{\sin 27^\circ} &= \frac{b}{\sin 45^\circ} \\ b &= \frac{200 \times \sin 45^\circ}{\sin 27^\circ} \\ &= 311.5 \text{ cm}\end{aligned}$$

$$\begin{aligned}\frac{a}{\sin 108^\circ} &= \frac{200}{\sin 27^\circ} \\ a &= \frac{200 \times \sin 108^\circ}{\sin 27^\circ} \\ &= 419.0 \text{ cm} \\ c^2 &= 800^2 + 419^2 - 2(800)(419)\cos 45^\circ \\ c &= 584.40 \text{ cm}\end{aligned}$$

Length required:

$$(800 + 584.40 + 419.0 + 311.5) \times 12 \div 100 \text{ m}$$

$$= 253.788 \text{ cm}$$

$\therefore$  260 cm required